

Extensions Unit, Station 4, Round 2, Task 3




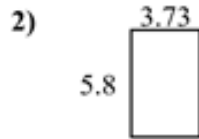
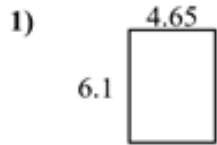
Finding Perimeter with Decimals

Name: **Answer Key**

Find the perimeter
to scale.

of each figure. Each figure is in centimeters (cm). Not

Answers



1. 21.5 cm

2. 19.06 cm

3. 20.6 cm

4. 11.26 cm

5. 31.4 cm

6. 31.82 cm

7. 22.5 cm

8. 11 cm

9. 32.6 cm

10. 19.24 cm

11. 14.76 cm

12. 23.82 cm

13. 25.58 cm

14. 30.6 cm

15. 28.3 cm

